

ATOMIC ENERGY CENTRAL SCHOOL No.-4, RAWATBHATA

Confidence Exam (2018-19)

Subject : English

Class – III

Section : _____ Date: 22/02/2019

Name of the student : _____

Roll No: _____

Invigilator's sign: _____

Time – 3 Hours

Examiner's sign: _____

MM : 80 MO : _____

READING (20 marks)

QA. Read the passage carefully and answer the following questions.

Mother your baby is silly! She is so very childish! She does not know the difference between the lights in the streets and the bright stars. When we play with pebbles, she thinks they are real food. She even tries to put them into her mouth. When I open a book before her and ask her to learn her A B C, she tears the pages with her hands and roars with joy at nothing. This is your baby's way of doing her lessons!

QA1. Add, 'ish' to the given word. Example child-childish (1)

Baby - _____

QA2. Write the word of similar meaning from the passage. (2)

Foolish- _____ stones- _____

QA3. Write the opposite of bright. _____ (1)

QA4. Why is the baby childish? Give one reason. (1)

_____.

QB. Read the poem carefully and answer the following questions.

The Lion walks on padded paws,
The Squirrel leaps from limb to limb,
While flies can crawl straight up a wall,
And seals can dive and swim.
The worm he wiggles all around,
The monkey swings by his tail,
And birds May hop upon the ground,
And spread their wings and sail.
But boys and girls
Have much more fun:
They leap and dance,
And walk and run.

QB1. Arrange the movement words from slow to fast. (2)

Run Hop Crawl Walk

QB2. Match the following. (2)

Flies	Leap
Seals	Wiggle
Squirrels	Dive
Worms.	Crawl

QB3. According to the poem who have the most fun ? (1)

QC. Read the story and answer the questions.

Once there lived a dog. He was very hungry. He wandered here and there in search of food. He got a juicy bone from a butcher's shop. He felt very happy. He took the bone and ran away. He reached on a bridge of a river. He saw his own shadow in to the water. He thought that there was another dog with a juicy bone in his mouth. His mouth watered and he wanted to snatch that bone from him. He started barking on him and as he opened his mouth, the bone fell down from his mouth into the river.

QC1. Choose one word from the story and write against the statements. (1)

One who needs food - _____

QC2. Choose the words from the story having the opposite meaning of the following words. (2)

Dry - _____ Closed - _____

QC3. Choose the words from the story having the similar meaning of the following word. (1)

Reflection - _____

QC4. Write 'Yes' or 'No' against the sentences. (2)

The bridge was on a river. _____

There was another dog in the story. _____

QC5. Choose the correct answer and fill in the blanks. (2)

The dog got a juicy _____. (Flash fruit bone)

He reached on a _____. (Terrace Bridge building)

QC6. Why did the dog wander here and there? (1)

QC7. What did the dog see into the water? (1)

Textual questions (10 marks)

Q1. Where do the trains run? (1)

Q2. What does the camel eat in the desert? (1)

Q3. Who are 'they' and 'them' in the poem 'Don't tell'? (2)

Q4. When does the baby laugh? (2)

Q5. Why do you think Meena was carrying her brother ? (2)

Q6. What happened to the little tiger cub when he chased the frog? (2)

Creative writing (10 marks)

Q1. Write a letter to your grandparents thanking them for the gift they have given you on your birthday. (5)

Dear grandparents,

With love

Q2. Describe a train journey in five sentences. (5)

(Hint- ticket ,railway station, window ,ticket checker, passengers, loud whistle, tiffin, seat)

Grammar (15 marks)

Q1. Add 'ful' to the word and fill in the blank. (1)

See, how _____ the moon is ! (beauty)

Q2. Add 'ly' to the word and write in the gap. (1)

He is _____ a smart boy. (real)

Q3. Write the full form in the gap. (we're) (1)

_____ studying in class 3.

Q4. Add 'ing' and write in the gap. (1)

I am _____ a letter. (Write)

Q5. Underline the silent letters in the given words. (1)

M o r e F i g h t

Q6. Rearrange the words to make meaningful sentence. (1)

Also / tiger / liked / the / roar / to / cub.

Q7. Make only one sentence using the given two words. (1)

(eight - ate)

Q8. Write the correct word on the correct place. (1)

(Two - too)

These _____ mangoes are _____ sweet.

Q9. Encircle the word with 'G' sound. (1)

Gem giraffe giant gold

Q10. Write two rhyming words for hare. (2)

hare _____

Q11. Rewrite the sentence correctly. (2)

i am ritu. do you know me

Q12. Write the Opposite words. (2)

High- _____ Asleep - _____

Vocabulary (10 marks)

Q1. Write one word that means- (4)

The time before the sun sets- _____

The man who travels in space craft- _____

A place where a pig lives _____

A man who washes our dirty clothes- _____

Q2. Write the names of the young ones of the following animals. (2)

Horse - _____ Sheep - _____

Q3. Make two words using the letters given in 'mother.' (2)

Q4. Write two words starting from the letter 'Q'. (2)

Spelling (10 marks)

Q1. Rearrange the jumbled letters to make new words. (4)

rysor _____ rtani _____

rdao _____ cleam _____

Q2. Underline the correct spelling. (4)

noughty naughty nauaghty

believe beleive bilieve

smileing similing smiling

pheasant pheasant pheasant



परमाणु ऊर्जा केंद्रीय विद्यालय क्र. - 4, रावतभाटा

विश्वास परीक्षा (2018-19)

विषय : हिन्दी

कक्षा - तीसरी

अनुभाग : _____

दिनांक : 20/02/2019

विद्यार्थी का नाम : _____

अनुक्रमांक : _____

निरीक्षक का हस्ताक्षर : _____

समय : 3 घंटा

परीक्षक का हस्ताक्षर : _____

पूर्णांक : 80 प्राप्तांक : _____

[I]

प्रश्न 1. पठित गद्यांश को पढ़कर नीचे लिखे प्रश्नों का उत्तर लिखो ।

तीन भाई थे। एक दिन सुबह का समय तीनों नए घरों की तलाश में निकल पड़े। गरम गरम धूप में वह सड़क पर चलत-चलत गए। थोड़ी दूर में आम का एक बड़ा पड़ आया। उसका नीचा छाया थी। तीनों भाई उसका नीचा आराम करने लगे।

(क) तीनों भाई किस चीज की तलाश में घर से निकले? (1)

उत्तर _____

(ख) तीनों भाई कहाँ आराम करने लगे? (1)

उत्तर _____

(ग) लिखा बदलो । (1)

भाई - _____

(घ) विलोम शब्द लिखो । (1)

सुबह × _____

(ङ) शब्द का अर्थ लिखो । (1)

तलाश = _____

प्रश्न 2. अवती को परखान करनका लिए वह सठ कपडाका एक टुकडा लकर अवती की दुकान में जा पहुँचा। दरवाजाका अदर घुसतही सठ बुलद आवाज में बोला - अवती, जरा यह कपडा तो अच्छी तरह सपरा दो । में दखना चाहता हूतुम्हारा हुनर कैसा है । तुम्हारी काफ़ी तारीफ़ सुनी थी, इसीलिए आया हूँ ।

(क) सठ कपडा लकर कहाँ पहुँचा ? (1)

उत्तर- _____

(ख) सठ नअपनी बुलद आवाज में अवती सक्या कहा ? (1)

उत्तर- _____

(ग) सठ नकिसकी तारी सुनी थी ? (1)

उत्तर _____

(घ) गद्यांश स 'ज' ध्वनि वाला शब्द छाँटकर लिखो । (1)

उत्तर- _____

(ङ) शब्द का अर्थ लिखो । (1)

हुनर = _____

प्रश्न 3. अपठित गद्यांश को पढ़ो और प्रश्नों का उत्तर लिखो ।

वर्षा थम गई थी। सभी बच्चोंमिट्टी का घरोँदाबनाकर खल्ल रहथे। कई पानी में कागज की नाव तैरा रहथे। मंदिर की सीढियों पर बैठी काजल कुछ सोच रही थी । कोई उसकी सहली नहींबनी थी । पिता दिन भर काम का कारण बाहर रहतथे जिससेवह अकल्लापन और माता की मृत्यु की वदना महसूस कर रही थी।

प्रश्न 1 बच्चोंकहाँ और किसकी नाव तैरा रहथे? (1)

उत्तर- _____

प्रश्न 2 काजल कहाँ बैठी थी ? (1)

उत्तर- _____

प्रश्न 3 काजल अकल्लापन क्यों महसूस कर रही थी ? (1)

उत्तर - _____

प्रश्न 4 वचन बदलो । (1)

मंदिर - _____

प्रश्न 5 'वदना' का सही अर्थ पर गोला लगाओ । (1)

वर्षा पीड़ा नाव घरोँदा

प्रश्न 6 बच्चोंक्या कर रहथे? (1)

उत्तर- _____

प्रश्न 7. विलोम शब्द लिखो । (1)

दिन भर × _____

प्रश्न 8. अपठित गद्यांश साँछाँटकर एक सज्जा व एक सर्वनाम शब्द लिखो । (2)

उत्तर- _____

प्रश्न 9. पानी का पर्यायवाची शब्द लिखो । (1)

उत्तर- _____

[II]

प्रश्न 1. (क) आजाद पशु या पक्षी को पिंजड़े में बंद करके रखना सही है या गलत ?

क्यों ?

(2)

उत्तर- _____

(ख) जब साँप नारियल का खोल में घुस गया तो मैंने क्या किया था ? मैंने ऐसा क्यों

किया होगा ?

(2)

उत्तर- _____

(ग) मजान - लिखो मजान को मजान क्यों कहते हैं ?

(1)

उत्तर - _____

प्रश्न 2. (क) सब्जी बहानवाली न क्य़ा सोचकर उस झोली भर मिर्च दी होगी ?

(2)

उत्तर- _____

(ख) एक रुपए में कितने पैसे होते होंगे ?

(1)

उत्तर - _____

(ग) कविता की वह पंक्ति लिखो जिससे यह पता चलता हो ।

(1)

काबुलीवाला कुछ शब्द अलग तरीके से बोलता था ।

उत्तर - _____

(घ) पंक्ति में लिखे गए शब्दों को आगे पीछे करके लिखो ।

(1)

वह खाता ही रहा मिर्च की छीमी को सिसियात ।

उत्तर - _____

[III]

प्रश्न 1 अवती अथवा साँप का बारा में पाँच वाक्य लिखो ।

(5)

उत्तर- _____

प्रश्न 2. एक दिन दो बिल्लियों को एक तरबूज मिला। दोनों सोचने लगी इस तरबूज को कैसे बाँटा जाए तभी बघर आ गया । आगे क्या हुआ होगा । पाँच वाक्यों में लिखो । (5)

अथवा

मीरा बहन की बात सुनकर गाँव के लोगों को निराशा हुई होगी। उन्होंने मीरा बहन से क्या कहा होगा ? सोचकर गाँव के लोगों की बातें लिखो ।

उत्तर- _____

[IV]

प्रश्न 1. सही मिलान करो । (2)

प्रशस्ती	अवश्य
ईर्ष्या	बिल्कुल
कतई	तारीफ़
जरूर	जलन

प्रश्न 2. चित्र देखकर मुहावरा लिखो । (1)



आरसी

उत्तर- _____

प्रश्न 3. उदाहरण देखकर शब्द बनाओ । (1)

जैसा- बुन बुनाई

चढ़ _____ रखा _____

प्रश्न 4. एक मात्रा बदलने से शब्द का अर्थ बदल जाता है ऐसी ही उदाहरण समझकर जोड़ा बनाओ । (1)

जैसा गाय गया

प्रश्न 5. 'लतू' शब्द पर गोला खींचो । (1)

---- जब्बा बगीचा दो ताजनीछू तोड़ लो ।

प्रश्न 6 'मिर्च का मजा' कविता का कवि का नाम लिखो। (1)

उत्तर- _____

प्रश्न 7 गलत लिखे वाक्यों को सही करके लिखो। (1)

--- पुतुल काम करना मना कर दिया।

उत्तर- _____

प्रश्न 8. सही विराम चिन्ह लगाओ। (1)

1) साँप धीराधीरा चल रहा था

2) तुम्हें यह कहानी कैसी लगी

प्रश्न 9. घर से संबंधित शब्दों पर गोला खींचो। (2)

आँगन	घण्ट	छज्जा	पुलिया
जोहड	कमरा	सीढी	रहट

प्रश्न 10. 'उत्तर' शब्द का अलग-अलग अर्थ समझते हुए एक वाक्य बनाओ। (1)

उत्तर- _____

प्रश्न 11 किन्हीं दो पत्तियों का नाम लिखो जिनकी नसें उभरी हों। (1)

प्रश्न 12 सही जगह पर (✓) का निशान लगाओ। (1)

ल खाना सबसे आसान -----	अनानास	अनार	कला
	आम	सब	अमरूद

प्रश्न 13. किसन किसस कहा ? (1)

खबरदार फिर कभी साँप का पास मत जाना ।

उत्तर- _____

[V]

प्रश्न 1. जोड़ मिलाओ । (2)

हाथी	दहाड़ना
गधा।	हिनहिनाना
शर्रा।	चिघाड़ना
घोड़ा।	रेंकना

प्रश्न 2. कविता की पक्तियाँ पूरी करो । (2)

आँख पोंछत, _____ रेत और , _____

वह खाता ही रहा _____ की छीमी को सिसियात

प्रश्न 3. शब्दों को आगे पीछे करके लिखो । (1)

--- उसी खोज में मैं भी निकली ।

उत्तर- _____

प्रश्न 4. दोनों बिल्लियों का बीच झगड़ा की जड़ क्या थी ? (1)

उत्तर- _____

प्रश्न 5. दिए गए शब्द का वाक्य में प्रयोग करो । (1)

धीरःधीरः_____

प्रश्न 6. गुरुजी थैली में क्या लिए जा रहा था? (1)

उत्तर-_____

प्रश्न 7. वाक्य का मतलब लिखो । (1)

‘अब बच्चा खतरासबाहर है’ ।

उत्तर-_____

प्रश्न 8. डक मारनवालाकिन्ही दो जसुओका नाम लिखो । (1)

[VI]

प्रश्न 1 किन्ही दो चीजों का नाम लिखो जिनका पकनकी महक तुम्हें पसंद हो । (1)

उत्तर-_____

प्रश्न 2. रोटी का कोई और दो नाम लिखो ? (1)

उत्तर-_____

प्रश्न 3. आटा साननको क्या कहतहैं ? (1)

उत्तर-_____

प्रश्न 4. आटा चक्की किस चीज सचलती है ? (1)

उत्तर-_____

प्रश्न 5 लिखो यक्या हैं ? (1)

नर्मदा कावशी सतलुज ब्रह्मपुत्र यमुना ।

उत्तर-_____

प्रश्न 6 लिखिए गए शब्दों में सबसे खतरनाक तुम्हारी समझ सँक्या है ? गोला लगाओ । (1)

बिजली चाकू काँच आग

प्रश्न 7. वाक्य सँसब्जियों का नाम ढूँढ कर लिखो । (1)

1. रानी बोली हमसँमत बोली _____

2. गोपाल कबूतर उड़ा दो _____

प्रश्न 8. किन्ही दो चीजों का नाम लिखो जिन्हें दखकर तुम्हारा मुँह में पानी आता हो । (1)

प्रश्न 9. गुठली वाला किन्ही दो ंलों का नाम लिखो । (1)

प्रश्न 10. इन कामों को करनँका लिए हम कहाँ जातँहैं ? (1)

1. सुराही खरीदनँ- _____

2. पखर बनवानँ - _____

[VII]

प्रश्न 1. अनुच्छद दखकर सुलख लिखो । (5)

लोग चकित थँ- बाग का अघर गए बिना पिजड़ा बध कैसँहो गया ? लोग मीरा बहन का पास पहुँचँ। लोगों नँसोचा कि गोपाल आश्रम पास में ही था, इसलिए शायद मीरा बहन को मालूम हो कि रात में क्या हुआ । पूछनँपर मीरा बहन बोली --

उत्तर- _____



Class – III

Section : _____ Date: 21/02/2019

Name of the student : _____ Roll No: _____

Invigilator's sign: _____ Time – 3 Hours

Examiner's sign: _____ MM : 80 MO : _____

Section A - 20


1. Fill in the blanks.

(1×10 = 10)

- a) 1 kilogram = _____ grams.
- b) 3×6 is 3 times _____ or _____ + _____ + _____
- c) January, March, May, July, _____, _____.
- d) Water is measured in _____.
- e) $64 \div 8 =$ _____
- f) 7×35 is _____ times _____ or _____ + _____ + _____ + _____ + _____ + _____ + _____
- g) One year = _____ days.
- h) $9 \times 7 =$ _____
- i) All numbers that end with 0, 2, 4, 6 or 8 are called _____ numbers.
- j) All numbers that end with 1, 3, 5, 7 or 9 are called _____ numbers.

2. Guess the weights and match.

(1×5 = 5)



1 kg 500 g



10 kg



More than 1000 kg



Less than 1 kg



2 kg

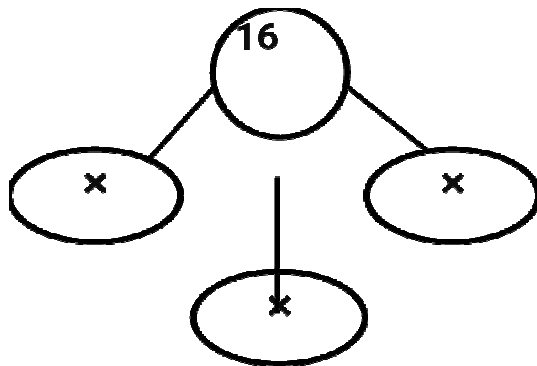
3. Choose the correct answer and fill in the blanks

(1×5 = 5)

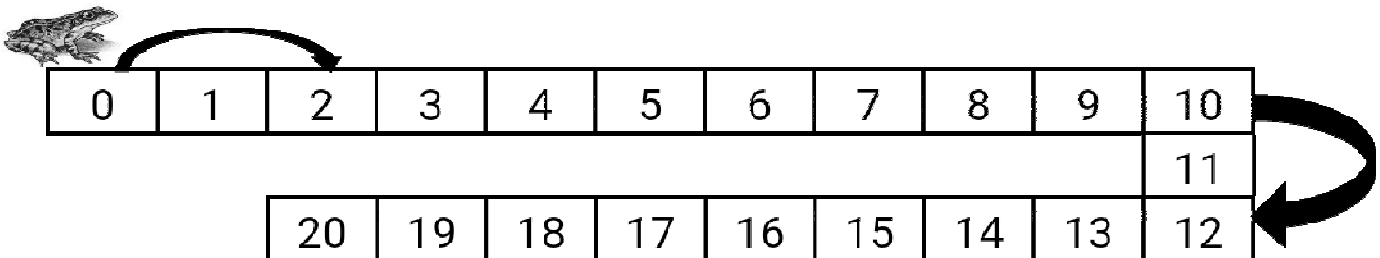
- a. $45 \div 5 = \underline{\hspace{2cm}}$ (7, 9, 4)
- b. $8 \times 8 = \underline{\hspace{2cm}}$ (64, 72, 25)
- c. My father's weight is $\underline{\hspace{2cm}}$ than 10 kg. (Less, More, Equal)
- d. How many days make a week? $\underline{\hspace{2cm}}$ (10, 16, 7)
- e. It takes $\underline{\hspace{2cm}}$ to reach Kota from Rawatbhata. (Hours, Month, Days)

Section B -20 (2×10 = 20)



1. Complete the multiplication facts.



2. 'Mandu' the frog jumps 2 steps each time. Which numbers will Mandu touch? Show by drawing the arrows and fill in the blanks.



3. Write the time shown on each clock's face.



4. Find the hidden sentences from these secret messages.

a) 5H5O5W 5I5S 5I5T _____

b) 3W3H3E3R3E 3A3R3E 3Y3O3U _____

5. Complete the following multiplication table.

a) 4×18 is 4 times _____ or _____ + _____ + _____ + _____

b) 3×20 is _____ times _____ or _____ + _____ + _____

6. Add-

a) Rs. 45 + Rs. 42.50 = _____ b) Rs. 65 + Rs. 78 = _____

7. Subtract-

a) Rs. 82 – Rs. 39 = _____ b) Rs. 124.50 – Rs. 72 = _____

8. Complete the following :

a) 3, 6, 9, _____, _____, _____

b) 7, 14, 21, 28, _____, _____, _____

9. Arrange the following names according to their alphabetical order.

Mohit , Akash, Narayan, Pulkit

1. _____ 2. _____ 3. _____ 4. _____

10. Distribute 20 beads into 5 equal groups.



SECTION C (2X10 =20)

1. Write the amounts of money shown by the notes and coins.



Sol: _____




Sol: _____

2. Complete the following pattern:

a) 2, 4, 8, 16, _____, _____

b) A, C, E, G, _____, _____

3. There are 8 cows in a herd. How many legs altogether do these cows have?



4. The cost of a toffee is 4 rupees. Find the cost of 7 toffees.



5. Pavan bought a notebook for ₹ 22.50 and a pencil for ₹ 2.50.
How much money did he spend for the two items together?

Sol:

6. Bharat has seen 20 footmarks of goats on the ground. How many goats were there on the ground?

Sol:

7. Multiply by box method.

$$81 \times 24 = \underline{\quad}$$

8. Fill in the blanks

- a. One litre = _____ millilitre
b. 6×5 means 6 times _____.

9. A gardener has planted 6 rows of saplings in his garden. Each row has 12 saplings. How many saplings are there in the garden?

10. Circle the odd numbers.

25

83

60



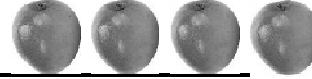




109

100

221

Section D – 20 (4×5 = 20)

1. Motaram's family is fond of mangoes. The number of mangoes ate by his family during a week is given in the chart. Study the chart and fill in the blanks.

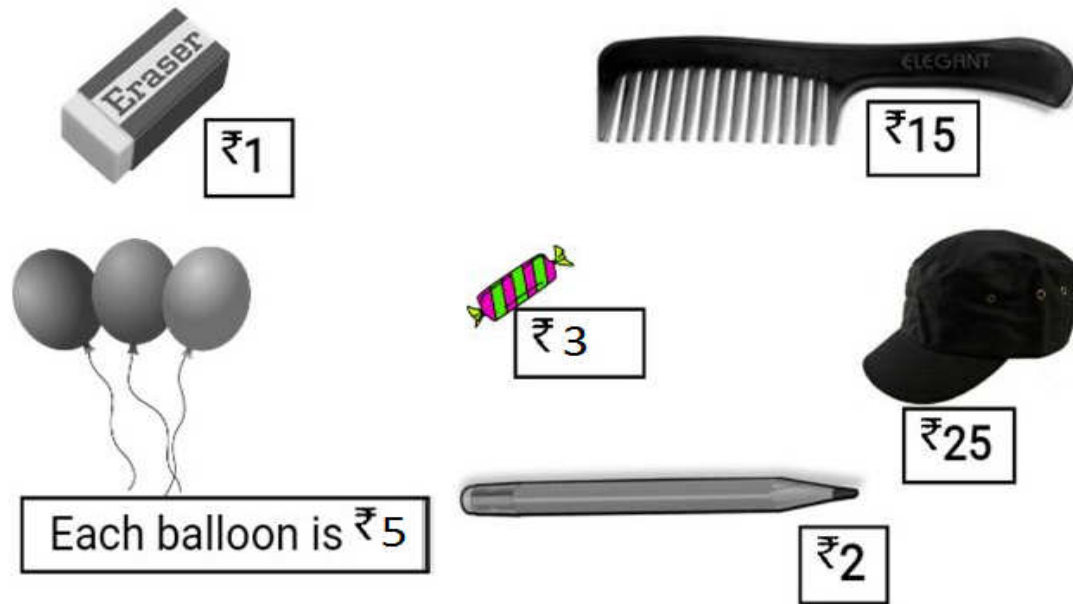
Monday	
Tuesday	
Wednesday	
Thursday	
Friday	
Saturday	
Sunday	

- i) The least number of mangoes ate on _____ and _____.
- ii) The most number of mangoes ate on _____.
- iii) Motaram's family ate _____ mangoes on Thursday.
- iv) _____ is the total number of mangoes ate by his family during the week.

2. Mohan bought things for Rs. 165.50. He has a 100-rupee note, 5 one rupee note and 3 ten rupee coins. Does he has enough money to pay the shopkeeper? If not, how much money he borrow from his friend?

3. Look at the prices of each item in the box and answer the following.

- a) The cost of an eraser and a pencil is _____.
- b) The cost of two toffees and three balloons is _____.
- c) The cost of a comb and a cap is _____
- e) The total cost of a comb, a balloon and a pencil is _____



4 a. Write all the even numbers between 463 to 478.

b. Name the shortest month of the year?

c. Leap year comes after every _____ years.

d. If we add 1 to an odd number then we get _____.

5. Look at the calendar for the year 2011 and answer the following

2011

January

S	M	T	W	T	F	S
						1
2	3	4	5	6	7	8
9	10	11	12	13	14	15
16	17	18	19	20	21	22
23	24	25	26	27	28	29
30	31					

February

S	M	T	W	T	F	S
			1	2	3	4
5	6	7	8	9	10	11
12	13	14	15	16	17	18
19	20	21	22	23	24	25
26	27	28				

March

S	M	T	W	T	F	S
			1	2	3	4
5	6	7	8	9	10	11
12	13	14	15	16	17	18
19	20	21	22	23	24	25
26	27	28	29	30	31	

April

S	M	T	W	T	F	S
					1	2
3	4	5	6	7	8	9
10	11	12	13	14	15	16
17	18	19	20	21	22	23
24	25	26	27	28	29	30

May

S	M	T	W	T	F	S
1	2	3	4	5	6	7
8	9	10	11	12	13	14
15	16	17	18	19	20	21
22	23	24	25	26	27	28
29	30	31				

June

S	M	T	W	T	F	S
			1	2	3	4
5	6	7	8	9	10	11
12	13	14	15	16	17	18
19	20	21	22	23	24	25
26	27	28	29	30		

July

S	M	T	W	T	F	S
					1	2
3	4	5	6	7	8	9
10	11	12	13	14	15	16
17	18	19	20	21	22	23
24	25	26	27	28	29	30
31						

August

S	M	T	W	T	F	S
			1	2	3	4
5	6	7	8	9	10	11
12	13	14	15	16	17	18
19	20	21	22	23	24	25
26	27	28	29	30	31	

September

S	M	T	W	T	F	S
					1	2
3	4	5	6	7	8	9
10	11	12	13	14	15	16
17	18	19	20	21	22	23
24	25	26	27	28	29	30

October

S	M	T	W	T	F	S
						1
2	3	4	5	6	7	8
9	10	11	12	13	14	15
16	17	18	19	20	21	22
23	24	25	26	27	28	29
30	31					

November

S	M	T	W	T	F	S
			1	2	3	4
5	6	7	8	9	10	11
12	13	14	15	16	17	18
19	20	21	22	23	24	25
26	27	28	29	30		

December

S	M	T	W	T	F	S
					1	2
3	4	5	6	7	8	9
10	11	12	13	14	15	16
17	18	19	20	21	22	23
24	25	26	27	28	29	30
31						

a) What is the date on second Friday in August _____

b) How many months have 30 days? _____

c) List the months which have 31 days.

d) What is the day on 22nd June _____



Class – III Section : _____ Date: 19/02/2019

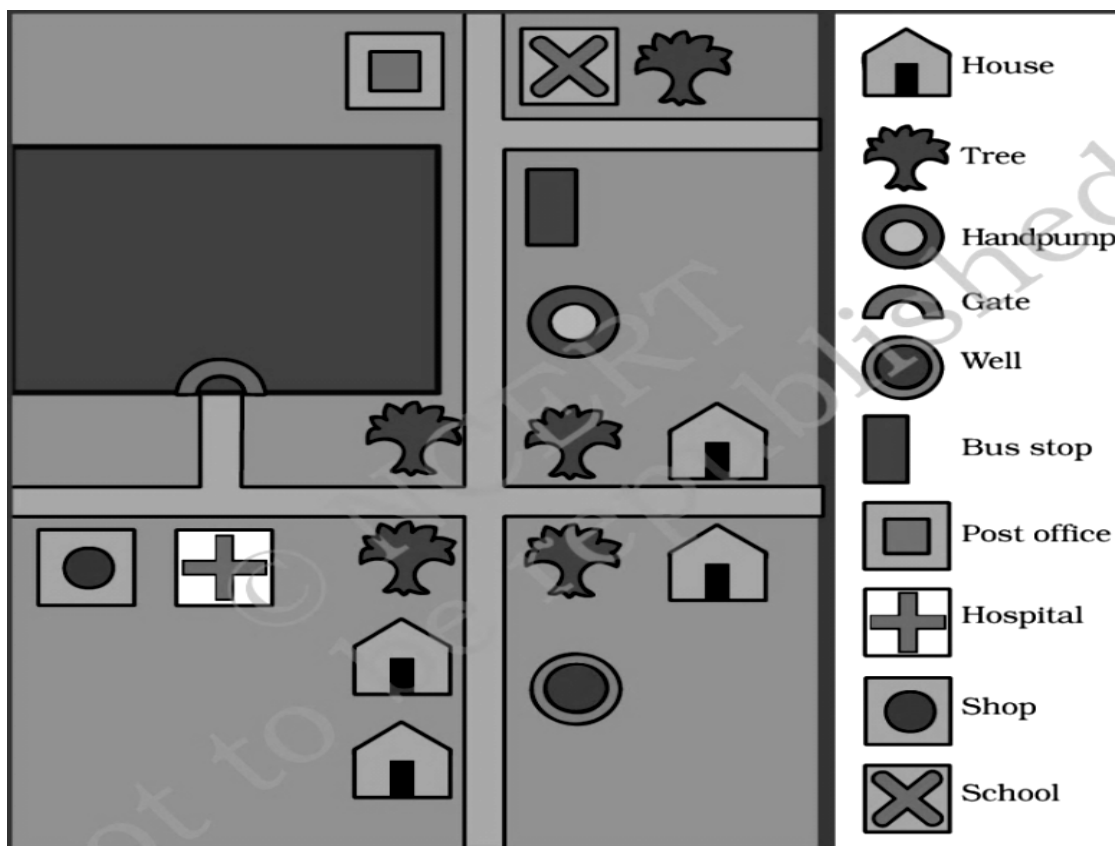
Name of the student : _____ Roll No: _____

Invigilator's sign: _____ Time – 3 Hours

Examiner's sign: _____ MM : 80 MO : _____

OBSERVATION AND REPORTING (30 Marks)

Q.1 Observe the pictures and answer the following questions. (5X1=5 Marks)



a. How many hand pumps are there in the map?

Ans: _____

b. How many trees are there in the map?

Ans: _____

c. What is near to the shop?

Ans: _____

d. Is the bus stop closer to the school or to the hospital?

Ans: _____

e. How many houses are there in the map?

Ans: _____

Q.2 Circle the plants which are used as medicine and write their name below.

Clove Potato Tomato Turmeric (4X1=4 Marks)
Brinjal Ginger Onion Tulsi

Q.3 Arrange the steps of pot making in order. (5X1=5 Marks)

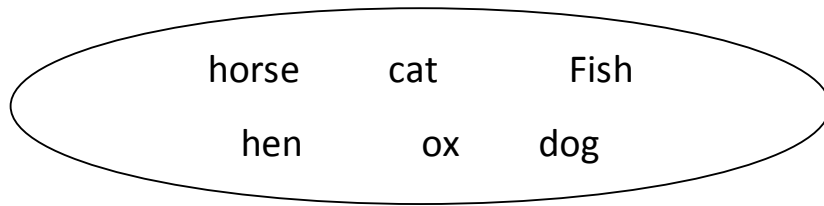
1. Mix the clay with water.
2. Decorate the pot using paint.
3. Dig the clay with trowel.
4. Dry the pots in the sun or kiln.
5. Shape the pot in the potter's wheel

Q.4 Observe the picture and write the name of the games played with ball.

(4X1=4 Marks)




Q.5 Name the following animals under the given headings: (6X $\frac{1}{2}$ =3 Marks)




Pet animals	Animals used as food	Animals which carry load

Q.6 Fill up the boxes in the correct order of food chain. (5X1=5 Marks)




Grass



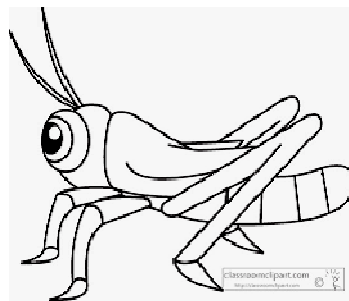
Snake



Eagle



Frog



Grasshopper




Q.7 Name the pictures.

(4X1=4 Marks)









IDENTIFICATION AND CLASSIFICATION (25 MARKS)

Q.1 Choose the correct option and fill in the blanks.

(5X1=5 Marks)

- a. _____ is an indoor game. (Ludo / Cricket)
- b. The food item that we get from plant is _____. (milk /potato)
- c. The person who repairs cars and scooter is called _____.
(blacksmith /mechanic)
- d. We take _____ when we have a toothache. (clove /tulsi)
- e. _____script is used by people who cannot see.
(Devnagari / Braille)

Q.6 Name four animals that we can not touch.

(4X $\frac{1}{2}$ =2 Marks)

Q.7 Write names of four unstitched clothes.

(4X $\frac{1}{2}$ =2 Marks)

DISCOVERY OF FACTS (25 Marks)

Q.1 What do these symbols stand for?

(5X1=5 Marks)











Q.2 From which animals do we get the following?

(4X $\frac{1}{2}$ =2 Marks)

Wool	
Milk	
Honey	
Egg	

Q.3 Using the clues given below, find the names of the games. (5X1=5 Marks)

P	L	A	Y	I	N	G	C	A	R	D	S	I
S	N	A	K	E	T	Y	L	A	D	D	E	R
P	H	K	N	Y	C	G	H	Y	S	J	L	D
H	J	K	U	T	H	D	C	V	B	N	M	Y
C	R	I	C	K	E	T	M	A	B	R	L	E
A	E	T	F	S	S	J	L	Y	T	D	S	V
U	Y	E	E	O	S	H	M	A	R	B	L	E
B	A	S	K	E	T	B	A	L	L	V	B	S

- i) It has no wings, but can fly, High, high up in the sky. - _____
- ii) Fours and sixes if you can get, A century is sure, I can bet. - _____
- iii) King, queen, ace and jack, Fifty two of them make a pack. - _____
- iv) On the board are squares black and white.
There's the king, the queen and the knight. - _____
- v) Game played with small coloured glass balls. - _____

Q.4 Give reason. (2X2=4 Marks)

1. Shankar was happy because _____

2. We should save water because _____

Q.5 Answer the following.

(3X2=6 Marks)

1. Why do we need a house?

2. Why do blind people carry white stick when they go out?

3. Who takes care of Tara? How?

Q.6 Make your family tree.

(3 Marks)