



ATOMIC ENERGY CENTRAL SCHOOL No.-4, RAWATBHATA

Periodic Test – 1 (2019-20)

Subject : English

Class – III

Section : _____

Date: 20/07/2019

Name of the student : _____

Roll No: _____

Invigilator's sign: _____

Time - 1 $\frac{1}{2}$ Hours

Examiner's sign: _____

MM : 40 MO : _____

Read the given passage properly and answer the given questions

" We love the little children" said a tiny bird. "They are kind and they bring bread for us". All the flowers said, "We must work hard to make our dresses very pretty, for the children will be here soon." The sun said, "I will help you also, for nothing pleases me better than to see the children running about in the golden sunshine.

Q1 a) Why did the birds love the children? (2)

b) Who was making the dress for the children? (1)

c) Give opposite of the given words. (2)

i) Little _____ ii) Hard _____

iii) Nothing _____ iv) Soon _____

d) complete the sentences- (1)

They are kind and they bring _____ .

Q2 Write the rhyming words of the given words. (2)

i) told _____ ii) night _____

iii) Trees _____ iv) Grass _____

Q3 Write the plural of the given words. (2)

Dress _____ bird _____
Poppy _____ Song _____

Q4 Write the suitable describing words for the following. (3)

_____ morning _____ garden _____ food
_____ sea _____ water _____ flowers

Q5. Write four sentences on birds using the following words. (4)

Nest	chirp	fly	wings	water
------	-------	-----	-------	-------

Q6 Choose the correct options and write in the given blank. (4)

a) We say _____ while going back to home.

(Good day / Goodbye / Hello / Good noon)

b) Opposite of night is _____. (noon / evening / day / none)

c) The birds live in _____. (hole / house / water / nest)

d) Rose is a a _____. (flower / tree / bush / Bird)

Q7. What do you see around you during the day and at night. Write two things for each. (2)

Day	Night
_____	_____
_____	_____

Q8. In the morning I say, "Good morning". (3)

- i) at night I say _____
- ii) a dog says _____
- iii) a cow says _____

Q9 Write down the missing letters to make the correct word. (2)

- I) S__n__ __ow__rs
- iii) S__h__ __l
- ii) P__p__y
- iv) M__ __ni__g

Q10. Write the past tense (II form) of the given words : (2)

Dance	_____	Sing	_____
Stop	_____	Stand	_____

Q11. Make sentences of given words. (2)

- i) Wedding _____
- ii) Garden _____

Q12. Answer the following questions in full sentences : (3)


i) Name the two birds in the poem.

ii) What did mother suggest?

Q13 Write in a good handwriting : (5)

There was a great joy in Nina's house.

1. _____
2. _____
3. _____
4. _____
5. _____



परमाणु ऊर्जा केंद्रीय विद्यालय क्र. - 4, रावतभाटा

प्रथम सामयिक परीक्षा (2019-20)

विषय : हिन्दी

कक्षा - तीसरी

अनुभाग : _____

दिनांक : 22/07/2019

विद्यार्थी का नाम : _____

अनुक्रमांक : _____

निरीक्षक के हस्ताक्षर : _____

समय : 90 मिनट

परीक्षक के हस्ताक्षर : _____

पूर्णांक : 40 प्राप्तांक : _____

प्रश्न-1 मक्खी उड़ते-उड़ते शेर ऊब गया था | तुम क्या करते करते ऊब जाते हो ? 1

उत्तर - _____

प्रश्न-2 वाक्य को अपने तरीके से लिखो | शेर आग बबूला हो उठा | 1

उत्तर - _____

प्रश्न-3 पहली बुझाओ | 1

कागज़ का घोड़ा, धागे की लगाम ,

छोड़ दो धागा , तो करे सलाम |

उत्तर - _____

प्रश्न-4 तुम अक्सर खाना खाकर क्या करते हो ? 1

उत्तर - _____

प्रश्न -5 गहरी नींद से जगाने पर तुम क्या करते हो ? 1

उत्तर - _____

प्रश्न -6 मुहावरे का अर्थ लिखो | 1

आव देखा न ताव -- _____

प्रश्न -7 सही विराम चिन्ह लगाओ | 1

1 -- लोमड़ी तुम कहाँ जा रही हो ____

2 -- शेर ने दो दिन से स्नान नहीं किया था _____

प्रश्न-8 किन्हीं दो कामों के नाम लिखो जिन्हें तुम चुटकी बजाते ही कर लेते हो | 1

उत्तर -- _____

प्रश्न -9 दो टोलियों के बीच खेले जाने वाले किन्हीं दो खेलों के नाम लिखो | 1

उत्तर -- _____

प्रश्न-10 घर की सफाई करने के लिए किन किन चीजों का इस्तेमाल होता है ? किन्हीं

दो के नाम लिखो ? 1

उत्तर -- _____

प्रश्न-11 तुम अपने घर में कौन से काम करते हो ? किन्हीं दो के नाम लिखो | 1

उत्तर -- _____

प्रश्न-12 कविता की पंक्तियाँ पूरी करो ? 1

मन करता है पापा बनकर , मैं भी अपनी _____ बढ़ाऊँ |

मन करता है _____ बनकर , दूर - दूर उड़ता जाऊँ |

प्रश्न- 13 शब्दों के अर्थ लिखो | 1

आसमान = _____ वार = _____

प्रश्न- 14 शब्दों को वर्ण क्रम से लगाओ |

झाड़ू मक्खी अम्मा तितली 2

उत्तर -- 1. _____ 2. _____ 3. _____ 4. _____

प्रश्न- 15 कक्कू कोयल जैसा क्यों नहीं है ? 2

उत्तर -- -----

प्रश्न-16 शब्दों को शुद्ध करके लिखो ? 2

बरबाद - ----- रसाकशी - -----
कोसिश - ----- परनाम - -----

प्रश्न -17 लिखो कहानी में ऐसा कौन था ? 2

चतुर - ----- समझदार - -----
आलसी - ----- घमंडी - -----

प्रश्न - 18 चाँद वाली अम्मा झाड़ू क्यों नहीं छोड़ना चाहती थी ? 2

उत्तर - -----

प्रश्न -19 इनके पास तुमने अक्सर किस - किस को उड़ते मँडराते देखा है ? 2

हलवाई की मिठाइयों पर - -----
फूलों पर - -----

प्रश्न -20 नाम वाले व काम वाले शब्द छाँटकर लिखो ? देखना कलम लड़ना झाड़ू 2

नाम वाले शब्द -----
काम वाले शब्द -----

प्रश्न - 21 तुम्हारा मन कब - कब चिड़िया बन जाने को करता है ? 2

उत्तर - -----

प्रश्न - 22 सही मिलान करो ।

2

कक्कू	सुरेन्द्र विक्रम
शेखीबाज मक्खी	योगेश जोशी
चाँद वाली अम्मा	रमेशचंद्र शाह
मन करता है	तारा निगम

प्रश्न - 23 कौन किस पर अकड़ जमाता होगा ?

2

जंगल में	-----	-----
खेल में	-----	-----

प्रश्न - 24 चाँद तारों पर क्यों अकड़ता होगा ?

2

उत्तर - -----

प्रश्न - 25 अनुच्छेद देखकर सुलेख लिखो ।

5

बहुत समय पहले सूरज और चाँद जमीन पर थे । पानी उनका दोस्त था ।
वे अक्सर उससे मिलने आते थे । लेकिन पानी कभी उनके घर नहीं जाता था ।
एक दिन सूरज ने पानी से पूछा - तुम कभी हमसे मिलने क्यों नहीं आते ?

उत्तर -----



ATOMIC ENERGY CENTRAL SCHOOL No.-4, RAWATBHATA
Periodic Test – 1 (2019-20)
Subject : Maths

Class – III **Section :** _____ **Date: 26/07/2019**
Name of the student : _____ **Roll No:** _____
Invigilator's sign: _____ **Time - 1 $\frac{1}{2}$ Hours**
Examiner's sign: _____ **MM : 40 MO : _____**

1. Fill in the blanks. 8

- a) Write the expanded form - $692 = \text{-----} + \text{-----} + \text{-----}$
- b) Write the number name. $265 = \text{-----}$
- c) Count by 10s and write the numbers 130, 140 ,150, ----- , -----
- d) A triangle has ----- sides.
- e) I am equal to a century = -----
- f) _____ + 56 = 82
- g) 11 less than 66 =-----
- h) 10 more than 45 =-----
- i) _____ - 43 = 33
- j) $68 + \text{-----} = 101$
- k) The sum of 9 and 61 is _____.
- l) 39 less than 72 is _____
- m) Reducing 71 by 35 gives _____.

2. Observe carefully. 678 , 345 ,155 ,955 Write the 1

(a) Smallest number=----- (b) Largest number=-----

3. Using a dotted line, divide the following pictures into two similar Halves. 2

E W U T

4. Put the to choose the correct answer. 2

a). Where have you to see the things this way?



Chair

Side view

Front view

Top view



Car

Side view

Front view

Top view



Car

Side view

Front view

Top view



Staircase

Side view

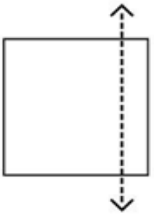
Front view

Top view

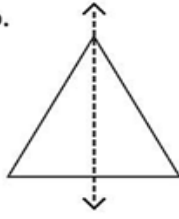
5. Does the dotted line divide each picture into two similar mirror halves?
Write 'Yes' or 'No'.

2

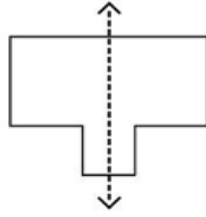
a.



b.



c.



d.



6. Write the numerals for the followings.

2

Four hundred thirty = -----

Two hundred ninety seven = -----

7. Write in short form.


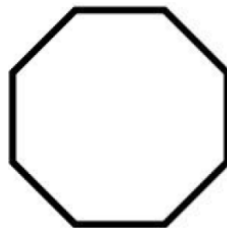
2

a) $900 + 40 + 4 = \text{-----}$

b) $700 + 0 + 7 = \text{-----}$

8. Using a dotted line, divide the following pictures into two similar halves.

2



9. A shopkeeper Ravi had 153 candles. Aras gave him 237 more candles. How many candles does Ravi have now?

2

10. In a cricket match, England made 415 runs. India has made 166 runs. How many more runs does India need to win? 2

11. Guess the words by looking at these halves and complete them: $3\frac{1}{2}$

ROOK

V
A
Y

12. Solve them. $23+56$ $2\frac{1}{2}$

$$= \dots + \dots + \dots + \dots$$

$$\dots + \dots + \dots$$

$$\dots + \dots$$

$$= \dots$$

13. Here are the cards for you. Work out the combination. Place the card in the right boxes. 3

50	70	20
----	----	----

$$\square + \square = \square$$

$$\square + \square = \square$$

14. Addition sums.

3

	4	5	2
+	1	3	8

	6	3	5
+	2	1	8

15. Who am I? Match with the number.

3

a) I come between 60 and 70
there is a 5 in my name.

50

b) I have 8 in my name and
I am very close to 80.

65

c) If you hit a 6 after me, you score a century.

150

d) I am equal to ten notes of 5.

75

e) I am a century+ a half century.

94

f) I am exactly in between 65 and 85.

78



ATOMIC ENERGY CENTRAL SCHOOL No.-4, RAWATBHATA

Periodic Test – 1 (2019-20)

Subject : EVS

Class – III **Section : _____**

Date: 24/07/2019

Name of the student : _____

Roll No: _____

Invigilator's sign: _____

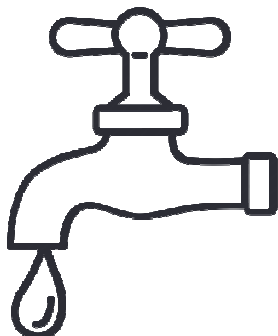
Time - 1 $\frac{1}{2}$ Hours

Examiner's sign: _____


MM : 40 MO : _____

Q.1 Observe the picture and write their names:

1X4=4



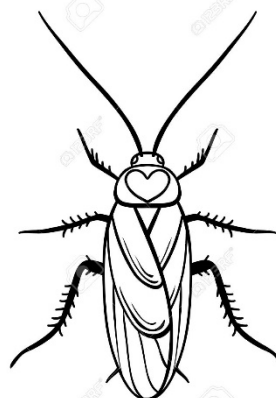
1. _____



2. _____



3. _____



4. _____

Q.2 Answer the following Questions:

a) Write two ways to keep our house clean?

2X2=4

b) Name any two trees-

i). that you have seen: 1. _____ 2. _____

ii) that you have not seen: 1. _____ 2. _____

Q.3 Do as directed :

2x2=4

1) Match the following:

- | | |
|------------------------------|----------------------------------|
| a) Father's mother is | needed for brushing teeth |
| b) kangaroo | main source of water |
| c) rain | paternal grandmother |
| d) water | can hop |

2) Name any two activities in which :

a) water is needed 1. _____ 2. _____

b) water is not needed 1. _____ 2. _____

Q.4) State whether the following statements are true or false:

1x6=6

a) Cow and donkey both can fly. ()

b) We cannot drink sea water. ()

c) Cat have wings. ()

d) Father's sister is our aunt. ()

e) Fish can live on land. ()

f) We use spoon to store water. ()

Q.5) Draw any two utensils used in kitchen and write their names. 3x2=6

--	--

Q.6) Answer the following – 1x6=6

a) Name any two animals that live in water.

1. _____ 2. _____

b) What do you call your mother's father?

c) Which part of your house is used for cooking food?

d) Name any two animals that can fly.

e) Write any two sources of water.

f) Name any two animals which can hop

Q.7) fill in the blanks-

(solid, uncle , crow ,house ,water , owls)

1x6=6

- a) _____ is needed in washing clothes.
- b) The sound of _____ is caw-caw.
- c) Bedroom is a part of our _____.
- d) Mother's brother is our _____.
- e) _____ remains awake the whole night.
- f). Ice is _____ form of water.

Q.6) Put a O (Circle) around one that is different from the others. 1x4=4

- a) monkey crow pigeon eagle
- b) brother sister uncle father
- c) cow horse dog sparrow
- d) writing making tea swimming cooking food