



**ATOMIC ENERGY CENTRAL SCHOOL No.-4, RAWATBHATA**

**Periodic Test – 1 (2019-20)**

**Subject : English**

**Class – V**

**Section : \_\_\_\_\_**

**Date: 24/07/2019**

**Name of the student : \_\_\_\_\_**

**Roll No: \_\_\_\_\_**

**Invigilator's sign: \_\_\_\_\_**

**Time - 1 $\frac{1}{2}$  Hours**

**Examiner's sign: \_\_\_\_\_**

**MM : 40 MO : \_\_\_\_\_**

1. Answer the following questions.

**4**

a) Why did the geese cry, "Help Help" ?

b) Why did the Maharaja go into the kitchen in the afternoon ?

2. Arrange the following sentences in correct order for preparing avial

**3**

- Grind some coconut, green chillies and garlic.
- Cut the vegetables scraps into long strips.
- Wash and clean the mix of vegetable bits.
- Decorate with curry leaves.
- Whip some curd and mix it in.
- Pour some coconut oil on top.
- Avial is ready.

3. Do as directed :

**3**

	-ed	-er	-est
large	x		
wise	x		
new	x		

4. Make sentences of the following words : 3

a) foolish \_\_\_\_\_

b) wise \_\_\_\_\_

5. Write the rhyming word: 2

blow \_\_\_\_\_

race \_\_\_\_\_

6. Write True or False : 2

a) The king had ordered a dinner in the palace. \_\_\_\_\_

b) The hunter climbed the tree with the help of ladder. \_\_\_\_\_

7. Fill in the blanks : 2

a) the boy ran \_\_\_\_\_ the dog. (to/with/ in)

b) He noticed the creeper \_\_\_\_\_ the foot of the tree. (at/in/of)

8. Frame the question. 2

(i) I play games. \_\_\_\_\_

(ii) I play in the ground. \_\_\_\_\_

9. Match the following words with their meanings : 4

a) cluster

a) move wings up and down

b) sternly

b) harsh

c) muttered

c) gather around

d) flapped

d) spoken in a low tone

10. Punctuate the given sentence :

1

a) how rahul had saved amit's life

---

---

11. Read the passage given below and answer the following questions:

5

Australia is an island. It is surrounded by the sea. However, as it is large in size, it is called a continent. It has long sandy beaches, grassy farmland and high mountains. It also has vast deserts and forests.

Australia is famous for sheep rearing. There are millions of sheep all over the country. These sheep are bred for their meat and wool. There are also many large cattle farms in Australia.

Kangaroos live in Australia too. These animals are native to Australia. The mother kangaroo carries her young in her pouch. Kangaroos can run very fast because they have powerful hind legs.

1. Why is Australia an island?

---

---

2. What helps the Kangaroo to run fast?

---

3. What is Australia famous for?

---

4. Write two adjective words from the given passage.

---

12. Describe your dream ice cream with the help of these words:

4

colours, flavours, size, how it looks, taste, feels etc.

---

---

---

---

---

13. Look at the picture and write five lines about it.

5



---


---

---

---

---

---



परमाणु ऊर्जा केंद्रीय विद्यालय क्र. - 4, रावतभाटा

प्रथम सामयिक परीक्षा (2019-20)

विषय : हिन्दी

कक्षा – पाँचवीं

अनुभाग : \_\_\_\_\_

दिनांक : 26/07/2019

विद्यार्थी का नाम : \_\_\_\_\_

अनुक्रमांक : \_\_\_\_\_

निरीक्षक के हस्ताक्षर : \_\_\_\_\_

समय : 90 मिनट

परीक्षक के हस्ताक्षर : \_\_\_\_\_

पूर्णांक : 40 प्राप्तांक : \_\_\_\_\_

1 - समान अर्थवाले शब्द लिखो -

4

मुश्किल ----- हिम्मत -----

जंगल ----- सम्मान -----

2 - चार अनाजों के नाम लिखो -

4

-----

-----

3 - जातिवाचक संज्ञा को व्यक्तिवाचक संज्ञा में बदलो -

4

भोजन -----

धातु -----

4 - नीचे लिखे वाक्यों को तुम किस तरह से लिख सकते हो -

4

0 होशियारी उसे छूकर भी नहीं गई थी ।

-----

0 उनकी अपनी चालाकी धरी रह गई ।

-----

0 चैन से जिंदगी चल रही थी ।

-----

0 मैं इसका हल निकाल देती हूँ ।

-----

5 - नीचे लिखे रेखांकित शब्द में संज्ञा , विशेषण , क्रिया आदि पहचानकर लिखो -

4

0 पानवाले के दुकान आज बंद है ।

-----

0 नंदू को बोलनेवाली गुड़िया चाहिए ।

-----

0 मैं रातवाली गाड़ी से दिल्ली जाऊँगी ।

-----

0 इस सामान को ऊपरवाले कमरे में रख दो ।

-----

6 - कटाव शब्द कट क्रिया से बना है । नीचे लिखी संज्ञाएँ किन क्रियाओं से बनी हैं ।

4

चुनाव

-----

बहाव

-----

लगाव

-----

पड़ाव

-----

7 - वाक्य बनाओ -

2

बड़बड़ाना

भुनभुनाना

8 - नीचे लिखे प्रश्नों के सही उत्तर पर सही के निशान लगाओ-

6

(क) तिब्बत के मंत्री का बेटा कैसा था ?

चालाक                      भोला                      झगड़ालू                      शरारती

(ख) गेहूँ क्या है ?

फल                      सब्जी                      अनाज                      कोई नहीं

(ग) धातु क्या है ?

व्यक्तिवाचक संज्ञा , जातिवाचक , भाववाचक , कोई नहीं

(घ) राम,सीता और ताड़का किस प्रसिद्ध कथा के पात्र हैं ?

रामायण, महाभारत , शिवपुरा ,                      कोई नहीं

(च) केशव का जन्म कहाँ हुआ था ?

गुजरात , दिल्ली, आगरा, सिकरी

(छ) केशव की उम्र कितने साल थी ?

10                      20                      30                      40

9 - नीचे लिखे प्रश्नों के उत्तर लिखो -

(क) मंत्री ने अपने बेटे को शहर क्यों भेजा था ?

2

उत्तर

(ख) अकबर

को पहरेदार की दखलंदाजी अच्छी क्यों नहीं लगी

2

उत्तर

(ग) अक्सर तुम किस तरह की बातों पर रूठते हो ?

2

उत्तर

(घ) बाहर देखने से समय का अंदाजा क्यों नहीं हो पा रहा था जिनके पास घड़ी नहीं होती वे समय का अनुमान किस तरह लगाते हैं ?

2

उत्तर





**ATOMIC ENERGY CENTRAL SCHOOL No.-4, RAWATBHATA**

**Periodic Test – 1 (2019-20)**

**Subject : Maths**

**Class – V**

**Section : \_\_\_\_\_**

**Date: 22/07/2019**

**Name of the student : \_\_\_\_\_**

**Roll No: \_\_\_\_\_**

**Invigilator's sign: \_\_\_\_\_**

**Time -  $1\frac{1}{2}$  Hours**

**Examiner's sign: \_\_\_\_\_**

**MM : 40 MO : \_\_\_\_\_**

**Q1.Fill in the blanks.**

**8 m**

- 1) 1 crore = \_\_\_\_\_ lakhs.
- 2)  $\frac{1}{5}$  of 600 m is \_\_\_\_\_ m.
- 3) If the speed of a log boat is 6km/hr, then it will cover \_\_\_\_\_ km in  $4\frac{1}{2}$  hours.
- 4) The shape of a figure changes when we change the \_\_\_\_\_.
- 5)  $\frac{1}{3}$  of 105 is \_\_\_\_\_.
- 6) We use a \_\_\_\_\_ to measure angle.
- 7) The alphabet 'F' has \_\_\_\_\_ angles.
- 8) At 7 : 20 O'clock the minute hand makes a \_\_\_\_\_ angle with the hour hand.

**Q.2. Draw the following angles.**

**4m**

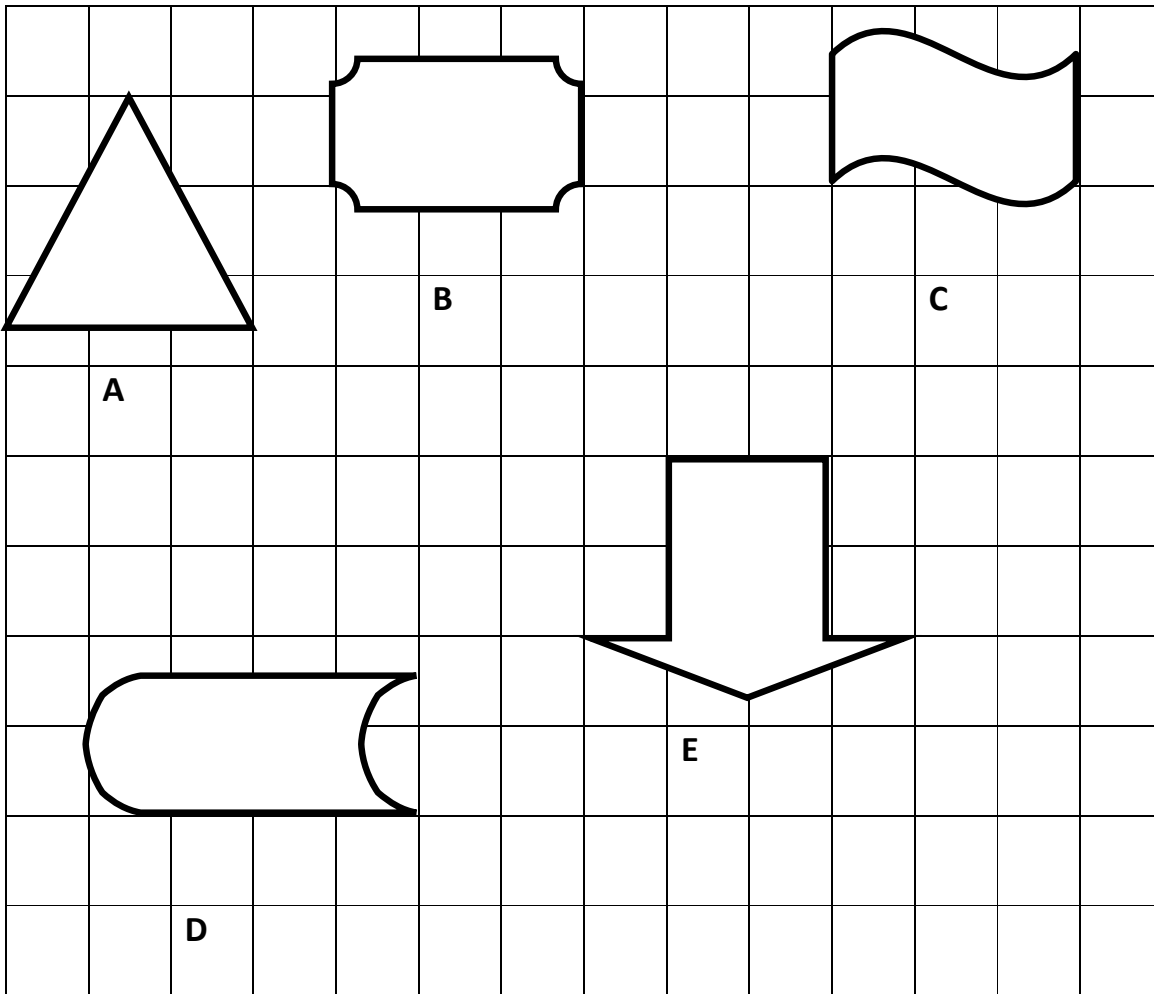
**$75^\circ$**

**$120^\circ$**

**Q.3. Draw a shape using 7 squares of 1 cm each and write its area and perimeter. 3m**

**Ans.**

Q.4. Write the area of the shaded part in given shapes. 5m



A- \_\_\_\_\_ B- \_\_\_\_\_ C- \_\_\_\_\_  
 D- \_\_\_\_\_ E- \_\_\_\_\_

Q.5. Write the number of different type of angles in the given words. 3m

**HATE TEN**

More than right angle	Less than right angle	right angle

Q.6. Answer the following.

(2x5=10m)

A. Ram took a loan of Rs 89000 to buy a scooter. He paid back Rs. 8300 per month for 1 year. How much money did he pay back after 1 year?

Ans.

B. A club has 30 members. Each member saves Rs. 80 every month. How much money does the club collect in 2 years?

Ans.

C. Ram went to fish market with Rs 400. The price of prawns is Rs 300 per kg and of squids is Rs 80 per kg. he spent  $\frac{3}{4}$  money on prawns and  $\frac{1}{4}$  on squids.


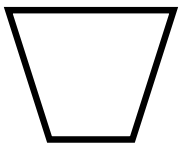
1)How much prawns did he buy? \_\_\_\_\_

2)How much squids did he buy? \_\_\_\_\_


D. A boat runs 30 km in one hour . How much time is needed to reach 165km?

Ans.

E. Mark the angles which are less than right angle in the following figures.



Q.7. What type of angle formed at these times? Also write the time. 4m




Angle \_\_\_\_\_

Time- \_\_\_\_\_



Angle- \_\_\_\_\_

Time- \_\_\_\_\_



Angle \_\_\_\_\_

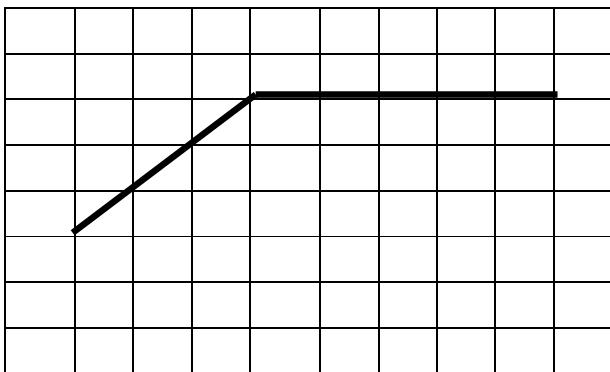
Time- \_\_\_\_\_



Angle- \_\_\_\_\_

Time- \_\_\_\_\_

Q.8. Draw two other lines to form a shape with area 15 sq cm. 3m





**ATOMIC ENERGY CENTRAL SCHOOL No.-4, RAWATBHATA**  
**Periodic Test – 1 (2019-20)**  
**Subject : EVS**

**Class – V**      **Section :** \_\_\_\_\_      **Date: 20/07/2019**  
**Name of the student :** \_\_\_\_\_      **Roll No:** \_\_\_\_\_  
**Invigilator's sign:** \_\_\_\_\_      **Time -1 $\frac{1}{2}$  Hours**  
**Examiner's sign:** \_\_\_\_\_      **MM : 40**      **MO : \_\_\_\_\_**

---

**OBSERVATION**

Q1. Observe the following pictures and answers the question given below:-

**(6 marks)**

a) Write the name and taste of the vegetable.



\_\_\_\_\_

b) Write the name of the musical instrument.



c) Write the name of the animal that can see six times better at night than most of us.



\_\_\_\_\_

d) Write the name of the animal that look like a bear and spends almost 17 hours a day in sleeping.



\_\_\_\_\_

e) Water in our mouth is known as?

\_\_\_\_\_

f) A person who can play the been and makes snakes dance by playing it. He is known as



\_\_\_\_\_

Q2. What do you mean by 'Proper Food'?

**(2marks)**

\_\_\_\_\_  
\_\_\_\_\_  
\_\_\_\_\_  
\_\_\_\_\_

Q3. Write the name of two animals whose ears are bigger than us.

**(2marks)**

a) \_\_\_\_\_ b) \_\_\_\_\_

### **IDENTIFICATION**

Q4. Circle the odd one.

**(2 marks)**

a) Eagle, Vulture, Kite, Dog

b) Cobra, Common Krait, Russell's viper, Python

Q5. Write true or false.

**(2 marks)**

a) All snakes are poisonous. ( )

b) The taste of mango is bitter. ( )

Q6. Give an example of food item which can be preserved by **(2marks)**

a) Boiling \_\_\_\_\_

b) Pickling \_\_\_\_\_

Q7. Write the name of two endangered species? **(2marks)**

a) \_\_\_\_\_ b) \_\_\_\_\_

Q8. Write the name of any two musical instruments in which we blow air into it to produce sound. **(2marks)**

a) \_\_\_\_\_ b) \_\_\_\_\_

Q9. (i) If we were to say that "digestion begins in the mouth." How would you explain this? **(2.5 marks)**

---

---

---

---

(ii) Why was sugar and jiggery mixed into the mango pulp and dried in the sun? **(2.5 marks)**

---

---

---

### **DISCOVERING FACTS**

Q10. Fill in the blanks **(2 marks each)**

a) We have \_\_\_\_\_ sense organs in our body.

b) Jim Corbet National Park is present in \_\_\_\_\_ state of India.

Q11. You know that today many animals are killed and their parts are sold.

What are the following animals killed for? **(2marks)**

a) Tiger: \_\_\_\_\_

b) Rhinoceros: \_\_\_\_\_

Q12. Answer the following questions. **(6marks)**

a) What is the manufacturing date of the medicine?

---

b) What is the expiry date of the medicine?

---

c) What is Kalbelia Dance ?

---

---

Q13. Draw the picture of human tongue and show the main four taste region?

**(5marks)**