

ATOMIC ENERGY CENTRAL SCHOOL No.-4, RAWATBHATA

Periodic Test – 2 (2019-20)

Subject : English

Class – III

Section : _____

Date: 06/01/2020

Name of the student : _____

Roll No: _____

Invigilator's sign: _____

Time - 1 $\frac{1}{2}$ Hours

Examiner's sign: _____

MM : 40 MO : _____

1. Read the given passage and answer the following questions : (3)

One night the mother tiger was tired and closed her eyes. The tiger cub saw a tiny frog, hopping along the ground. The tiger cub Pounced, but the frog hopped away.

He chased the frog and caught it, and turned to show his mother

a. What did the tiger cub see?

b. What happened to the mother tiger?

c. Write the opposite of the given words

(i) Day _____ (ii) Open _____

2. Read the given stanza and answer the following questions: (2)

Most always, when the postman comes
with letters, two or three,
They're for my Mother or my Dad.
But never one for me.

a. Who comes to the girl's house?

b. What does he bring?

3. Match the following: (4)

- | | | | | |
|-----------|--------------|---|---|-------------------------|
| a. | A teacher | * | * | makes people laugh |
| b. | An astronaut | * | * | mends our show |
| c. | A Cobbler | * | * | teaches in school |
| d. | A clown | * | * | travels in a spacecraft |

4. Write four words which are hidden in the word POSTMAN? (2)

- (i) _____ (ii) _____ (iii) _____ (iv) _____

5. Unscramble the letters and make proper words. (4)

- | | |
|-------------------------|------------------------|
| a. NPSMTOA _____ | b. RIEFDN _____ |
| c. TLETRE _____ | d. EEGRN _____ |

6. Write 'a' or 'an' before the following: (2)

- a).** __ engine **b).** __ man **c).** __ honest girl **d).** __ umbrella

7. Write the names of wild animals and domestic animals. (2)

wild animals

- (i) _____
(ii) _____

domestic animals

- (i) _____
(ii) _____

8. Write the sounds made by the following animals (4)

- a).** Tiger _____ **b).** Bee _____

9. Rearrange the words to form meaningful sentences (2)

- a).** Colours/the/has/seven/rainbow

-
- b).** Man/the/vegetable/it/is
-

10. Complete the following sentences using is/am/are/was or were (1)

- a).** I _____ eight years old.
b). We _____ best friends.
c). Yesterday _____ a hot day.
d). The Tajmahal _____ in Agra.

11. Use can and cannot alternatively in the following sentences (1)

a). I _____ hear the bus horn.

b). I _____ hear the sound of feet.

12. Fill in the blanks with rhyming words. (1)

a). Hill _____, _____

b). Going _____, _____

13. Match animals with their homes (2)

a). Bird * * Web


b). Rabbit * * Nest

c). Snake * * Burrow

d). Spider * * Hole

14. Write the paragraph neatly. (5)

There was a mother tiger and her small tiger cub. They lived near a river in a shady jungle. When the sky was dark, the mother tiger hunted for deer and pig. The tiger cub stayed close to his mother's side.



परमाणु ऊर्जा केंद्रीय विद्यालय क्र. - 4, रावतभाटा
द्वितीय सामयिक परीक्षा (2019-20)

विषय : हिन्दी

कक्षा - तीसरी अनुभाग : _____ दिनांक : 07/01/2020
विद्यार्थी का नाम : _____ अनुक्रमांक : _____
निरीक्षक के हस्ताक्षर : _____ समय : 90 मिनट
परीक्षक के हस्ताक्षर : _____ पूर्णांक : 40 प्राप्तांक : _____

प्र.1 बाट किस धातु या चीज़ के बने होते हैं ? 2

प्र.2 किन-किन चीज़ों की महक आती है जो खाने से जुड़ी नहीं है ? 2

प्र.3 इन वाक्यों के शब्दों को आगे-पीछे करके लिखो । 2

- उसी खोज में मैं भी निकली ।

- रखी मेज़ पर है वो रोटी ।

प्र.4 नीचे के वाक्यों में से हरी-भरी सब्जियों के नाम ढूँढ़कर लिखो । 2

- रानी बोली - हमसे मत बोलो । - -----

- गोपाल कबूतर उड़ा दो । - -----

प्र.5 उदाहरण की तरह करो ।

2

उदा. चढ़ - चढ़ाई

साफ़ - ----- पढ़ - -----

प्र.6 जिन शब्दों के नीचे रेखा खींची है, उसका मतलब सामने की खाली जगह में लिखो । 2

(क) हमने उनका मंसूबा भाँप लिया था । - -----

(ख) सेठ को ईर्ष्या होने लगी । - -----

प्र.7 रोटी को अलग - अलग जगहों पर अलग - अलग नामों से पुकारा जाता है । कोई दो नाम लिखो । 2

प्र.8 इन कामों के लिए कहाँ जाते हैं ? 2

• जूते की मरम्मत करवाने - -----

• बाल कटवाने - -----

प्र.9 दिए गए वाक्यों को ठीक करो । 2

(क) धूप बैठकर ढोकला खाया ।

(ख) पुतुल काम करने मना कर दिया ।

प्र.10 खाली जगह में दिए गए जानवरों की बोलियाँ लिखो । 2

उदा. गाय - रँभाना

बकरी - ----- घोड़ा - -----

प्र.11 नीचे लिखी हुई चीज़ें क्या हैं ? 2

उदा. नर्मदा, कावेरी, सतलुज, यमुना - नदी

गेहूँ, बाजरा, चावल, मक्का - -----

जलेबी, पेड़ा, कलाकंद, मैसूरपाक - -----

प्र.12 शब्द शुद्ध करके लिखो । 2

पालतु - ----- शीकार - -----

प्र.13 नीचे लिखे शब्दों के वचन बदलकर लिखो । 2

बिल्ली - ----- रोटी - -----

प्र.14 गाँधी जी से जुड़ी हुई दो चीज़ों के नाम लिखो । 2

प्र.15 नीचे दिए गए प्रश्नों के उत्तर लिखो ।

• बाघ की खबर पूरे गाँव में कैसे फैल गई ? 2

- सेठ कपड़ा किस दिन लेने आया होगा ? 2

- गुरु जी थैली में क्या लिए जा रहे थे ? 2

- दोनों बिल्लियों के बीच झगड़े की जड़ क्या थी ? 2

- प्र.16 मीरा बहन के बारे में कोई चार वाक्य लिखो । 4



ATOMIC ENERGY CENTRAL SCHOOL No.-4, RAWATBHATA

Periodic Test – 2 (2019-20)

Subject : Mathematics

Class – III Section : _____

Date: 10/01/2020

Name of the student : _____

Roll No: _____

Invigilator's sign: _____

Time - $1\frac{1}{2}$ Hours

Examiner's sign: _____

MM : 40 MO : _____

1. Fill in the blanks.

5Marks

- a) All numbers that end with 0, 2, 4, 6 or 8 are called _____ numbers.
- b) All numbers that end with 1, 3, 5, 7 or 9 are called _____ numbers.
- c) If we add 1 to any odd number we get an _____ number.
- d) If we add 1 to any even number we get an _____ number.
- e) The standard units for measuring liquids are _____ and _____
- f) Small amounts of liquids like medicine are measured in _____
- g) We write litre as _____ and milliliter as _____.
- h) _____ millilitres make a litre.
- i) A half litre = _____ millilitres.
- j) 1 litre = _____ milliliters.


2. Put a to choose the correct answer. For which of these do you need a **bigger bag**?

2Marks

- | | | |
|----|--|--|
| a) | <div style="border: 1px solid black; padding: 5px; display: inline-block;">1 kg popcorn</div> | <div style="border: 1px solid black; padding: 5px; display: inline-block;">1 kg sugar</div> |
| b) | <div style="border: 1px solid black; padding: 5px; display: inline-block;">1 kg potatoes</div> | <div style="border: 1px solid black; padding: 5px; display: inline-block;">1 kg peas</div> |
| c) | <div style="border: 1px solid black; padding: 5px; display: inline-block;">1 kg chillies</div> | <div style="border: 1px solid black; padding: 5px; display: inline-block;">1 kg tomatoes</div> |
| d) | <div style="border: 1px solid black; padding: 5px; display: inline-block;">1 kg cotton</div> | <div style="border: 1px solid black; padding: 5px; display: inline-block;">1 kg rice</div> |

3. Guess the weights and match.

2Marks



1 kg 500 g



10 kg



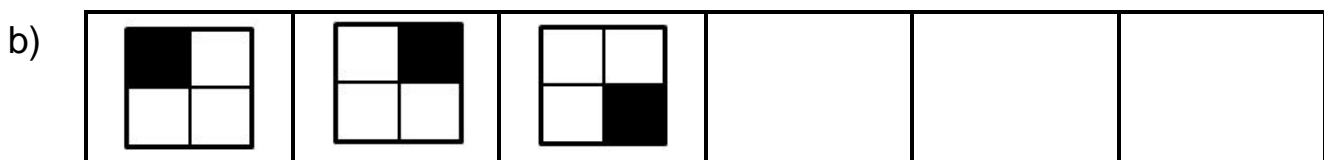
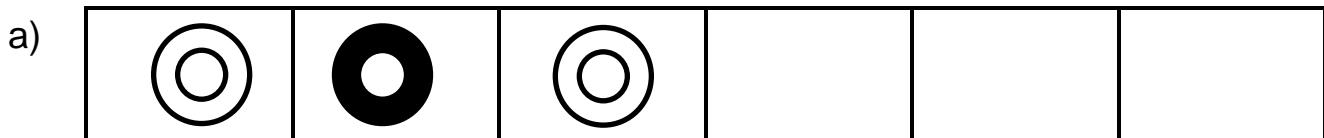
More than 1000 kg



Less than 1 kg

4. Observe the pattern and continue it.

3 Marks



5. Look for the rules and continue the following growing patterns.

4 Marks

a) 1, 3, 5, 7, _____ , _____ , _____ , _____

b) 11, 21, 31, 41, _____ , _____ , _____ , _____

c) 9, 18, 27, 36, _____ , _____ , _____ , _____

d) 40A, 42C, 44E, 46G, _____ , _____ , _____ , _____

6. Rewrite using the + sign.

4 Marks

a) 5×9 is ___ times ___ or ___ + ___ + ___ + ___ + ___

b) 7×12 is ___ times ___ or ___ + ___ + ___ + ___ + ___ + ___ + ___

7. Solve the problems.

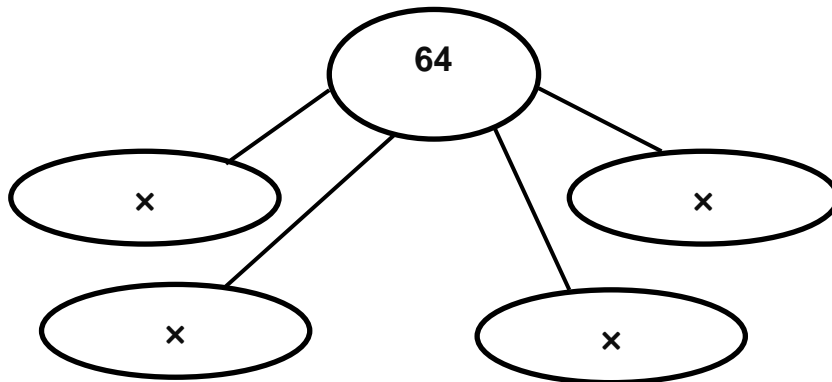
12 Marks

a) Reena needs three glasses of water to fill a jug. How many glasses of water are required to fill 5 jugs?

2 Marks

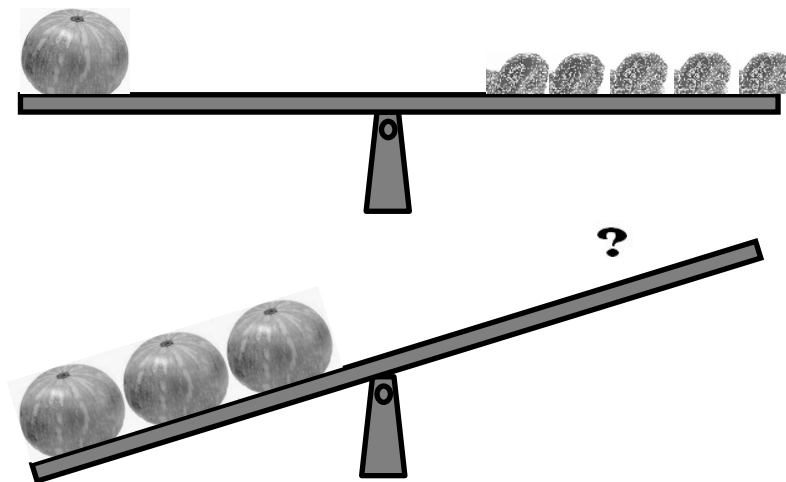
b) Complete the multiplication facts.

2 Marks



c) 5 big mangoes can balance a pumpkin. How many big mangoes can balance 3 pumpkins?

2 Marks



d) A bus has 6 wheels. How many wheels do 5 buses have?

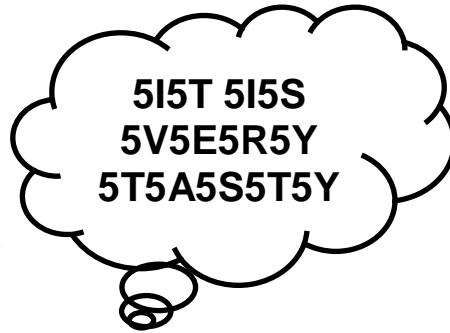
2 Marks

e) The cost of a toffee is 4 rupees. Find the cost of 7 toffees.

2 Marks

f) Find the hidden sentences from these secret messages.

2 Marks




Girl: _____ ?

Boy: _____ .

8.Solve the following questions.


8 Marks

a) We need 12 mugs of water to fill Pot A. Pot B gets filled with 24 mugs of water. If jugs are used, pot A gets filled with 5 jugs. How many jugs of water are needed to fill pot B?



b) Multiply by box method:

$42 \times 15 =$ _____



ATOMIC ENERGY CENTRAL SCHOOL No.-4, RAWATBHATA

Periodic Test – 2 (2019-20)

Subject : EVS

Class – III

Section : _____

Date: 08/01/2020

Name of the student : _____

Roll No: _____

Invigilator's sign: _____


Time - 1½ Hours

Examiner's sign: _____

MM : 40 MO : _____

Q 1. Identify the pictures of different types of houses and write their names. 1 x 4 = 4

a)




(.....)

b)




(.....)

c)



(.....)

d)



(.....)

Q 2. Choose the correct answer and fill in the blanks:

1 x 5 = 5

- a) The capital of India is
(New Delhi / Pune / Haryana)
- b) Braille script was given by
(Robert / Johnson / Louis Braille)
- c) Bhanate went to the to get a trowel.
(potter / blacksmith / river)
- d) Sania Mirza is a player.
(Tennis / hockey / football)
- e) is what we like to do in our free time.
(Bathing / Hobby / Studying)

Q 3. Write the name of the games in the given space for the riddles. 1X2= 2

- On the board are squares black and white.

There's king, the queen and the knight.

- It has no wings but it can fly.

High, high up in the sky.

Q 4. Match the following:

1 x 5 = 5

Column I

Column II

1. Badminton
2. Bhupen
3. Mango
4. Cricket
5. Milk

- a) Butter
- b) Ball
- c) Shuttle cock
- d) Lives in Assam
- e) Fruit

Q 5. Write the name of sparrow and crow in the story 'Making pots'. 1 x 2= 2

Sparrow _____

Crow _____

Q 6. Give any two examples: 1 x 4 = 4

a) fruits :

b) Outdoor games :

c) vegetables :

d) Indoor games :

Q 7. Answer the following questions: 2 x 4 = 8

a) Who all helped the crow to make the pot?

Ans
.....

b) What kind of problems do people have in old age?

Ans
.....

c) What are the advantages of a mobile phone?

Ans
.....

d) What does PIN code stands for ?

Ans
.....

Q 8. Write true or false :

1 x 4 = 4

- a) We need dice to play hockey -
- b) Apple is a non vegetarian food -
- c) Manali is a hilly area -
- d) Cheese is a milk product. -

Q 9. Circle the Odd one out:

1 x 3 = 3

- a) See, walk , hear , feel
- b) Hockey , cricket, chess, football
- c) Mango , ladyfinger, banana, apple

Q 10. Draw a letter box and colour it.

1 x 3 = 3