

ATOMIC ENERGY CENTRAL SCHOOL No.4, RAWATBHATA
WORKSHEET FOR ANNUAL EXAM

Name: _____ CLASS : V / Sec. _____ SUB : MATHS

1. Choose the correct answer from the brackets and fill in the blanks.

- a) The length of a rectangle is 4cm and its area is 12 square cm .
Its breadth is _____ cm. (2 3 16)
- b) _____ is the state which have sea on one side.
(Madhya Pradesh Uttar Pradesh Tamilnadu)
- c) Perimeter of a square of side 5 cm is _____ cm.
(20 25 15)
- d) $300 \div 10 =$ _____ (3 3000 30)
- e) $\frac{1}{4}$ of a rupee = _____ paise (75 25 10)
- f) A _____ has 6 faces. (cube square rectangle)
- g) The length of boundary of a closed figure is called its _____.
(perimeter volume area)
- h) $200 \times 3400 =$ _____ (680 6800 680000)

Q.2 On a particular day currency rates are as follows:

- 1 U.S.A. Dollar = 63.70 Indian rupees
1 Euro = 78.50 Indian rupees
1 Yuan = 9.50 Indian rupees
1 Nepal rupee = 0.76 Indian rupee

i) The money of which country will cost the most in Indian rupees?

ii) Mahesh's uncle in USA sent him 10 USA dollars as a gift. He used 300 rupees for buying books. How much money was left with him?

iii) Meena's father brought a dress for her. It costs 15 Euros. Find what it cost in Indian rupees?

iv) What is more in Indian rupees 10 Yuan or 50 Nepal rupees?

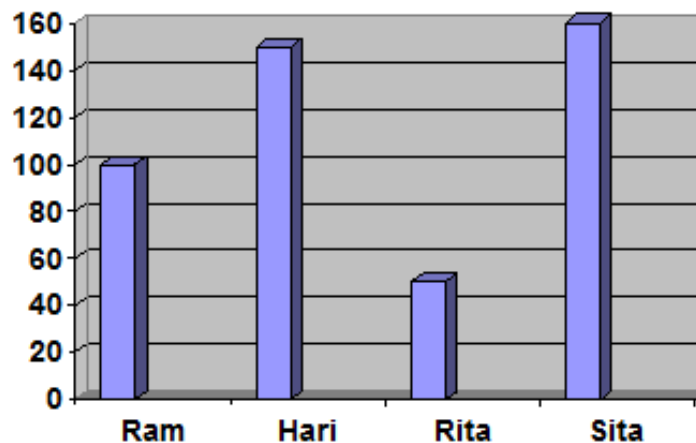
Q.3 Solve

1) A baby elephants drinks around 12 L of milk everyday. How much milk will it drink in 2 year?

2) Sanjay drinks 9 glasses of water everyday. How much glasses will he drink in a week?

3) There are 98 trees in a row. Find the number of trees in 18 such rows?

Q.4 The marks of four students are shown in the following bar chart.



i) Who scored maximum marks?

Ans _____

ii) Find the difference between marks of Ram and Rita?

Ans _____

iii) How many less marks Hari got than Sita?

Ans _____

iv) Who scored minimum marks?

Ans _____

ATOMIC ENERGY CENTRAL SCHOOL No.4, RAWATBHATA
WORKSHEET FOR ANNUAL EXAM

Name: _____ CLASS : V / Sec. _____ SUB : MATHS

Q.1 Fill in the blanks.

- a) The state of Andhra Pradesh is to the _____ of Madhya Pradesh.
- b) A tree is 4.80 m high. The height of the tree is 4m and _____ cm.
- c) If 150 m on ground is shown by 1cm on the map then 450m will be shown by _____ cm on the map.
- d) Shyam earns Rs.75 in a day. So he will earn _____ rupees in a week.

Q.2 Write true or false.

- a) $150 \times 60 = 9000$ _____
- b) The appropriate unit to measure an area of a saree is square km. _____
- c) $1\text{mm} = \text{_____ cm}$ _____
- d) A hexagon has 5 sides. _____
- e) 57 is an odd number. _____

Q.3 Do as directed.

- a) Divide $1232 \div 18$
- b) Multiply 175 by 39

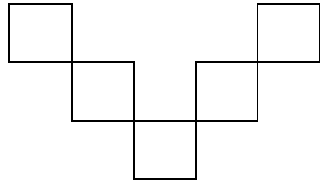
- b) A pencil costs one and a half rupee. How much will two and half dozens pencils cost?

- c) 476 students are standing in 28 rows. How many students are standing in each row?

- d) Harish took a loan to build his house. He has to pay back rupees 2750 every month for two years. How much will he pay back in 2 years?

e) If 10 one rupee coins weigh 48 grams, then how much will 100 coins weigh?

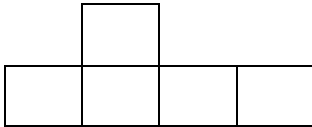
f) Find area and perimeter of the figure .(each square is of side 1cm)



Area= _____

Perimeter = _____

g) Tick the shape which can be used to make an open box.



h) A square carom board has a perimeter of 320 cm. How much is its area?

i) When 8 five rupee coins are put in a measuring bottle, they push 10 ml of water. Ram has put some five rupee coins in the measuring bottle. How many coins he has put in it, if 40 ml water is pushed up?


j) In a long jump competition Rehana jumped 4.50m and Meena jumped 4.05 m. Who jumped longer? Find the difference in the two jumps.

k) There are 32 biscuits in 1 kg. How many biscuits will be there in 15kg?
If 24 biscuits can be packed in a packet, how many packets are needed to pack all the biscuits?

ATOMIC ENERGY CENTRAL SCHOOL No.4, RAWATBHATA
WORKSHEET FOR ANNUAL EXAM

Name: _____ CLASS : V / Sec. _____ SUB : MATHS

Q.1 Colour 0.05 part of this square with yellow and 0.15 part with red.



Q.2 Write two things which tell you whether the 50 rupees note is real or fake.

1. _____
2. _____

Q.3 Read the table and answers the following questions.

City	Temperature at 3:00 a.m
Ahmedabad	29.5° C
Surat	31.8° C
Vyara	30.2° C
Rajkot	33.6° C
Vadodra	32.0° C

- i) The difference in temperature between Vyara and Surat is _____
- ii) The lowest temperature was recorded at _____

Q.4 Draw two different rectangles having equal areas. Write perimeter of each.


Q.5 Solve

a) A tank is full of 400 L of water. How much water will be filled in 8 such tanks? If 10 buckets can be filled with one tank of water how many buckets can be filled with the water in 10 tanks?

b) Disha has Rs. 1500 with her. She wants to buy oil. One litre of oil costs Rs. 75. How many litres can she buy?

c) A farm worker in Haryana gets Rs.135 per day. If he works for 8 weeks how much money will he earn?

d) Raghu has a cardboard box of length 6cm, breadth 2cm and height 4cm as shown in the figure. How many cubes of size 2cm each can be placed in the box?



e) Jaydeep plans to tile his front room floor with white square tiles. Each side of the tile is 15 cm. His front room is 450 cm in length and 300 cm in width. How many tiles will he need?

f) A sack contains 5 rupee coins. The sack weighs 2 kg 250 gm, if each 5 rupee coins weigh 9 g, how many 5 rupee coins are there in the sack ?

g) Madan bought a compass box for Rs30, a notebook for Rs.12.50 and a ruler for Rs4.75. If he gives the shopkeeper a 100 rupee note how much money he will get back?